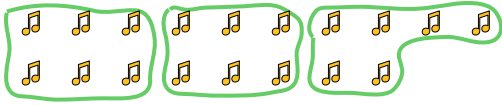







Use the shapes provided to answer the questions.

Ex) How many groups of 6 can you make with the 18 shapes below?



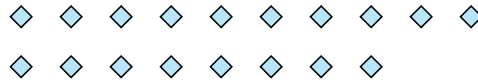
1) How many groups of 8 can you make with the 32 shapes below?



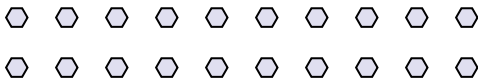
2) How many groups of 2 can you make with the 12 shapes below?




3) How many groups of 6 can you make with the 18 shapes below?



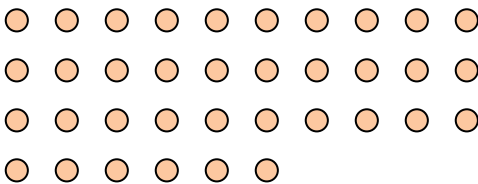
4) How many groups of 2 can you make with the 20 shapes below?



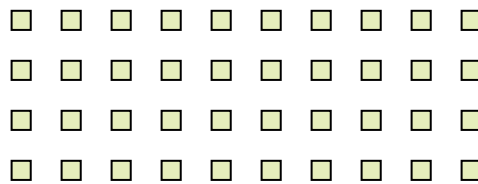
5) How many groups of 6 can you make with the 36 shapes below?



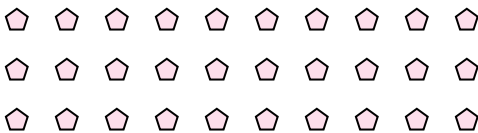
6) How many groups of 3 can you make with the 36 shapes below?



7) How many groups of 4 can you make with the 40 shapes below?



8) How many groups of 3 can you make with the 30 shapes below?



9) How many groups of 5 can you make with the 30 shapes below?



10) How many groups of 2 can you make with the 40 shapes below?



11) How many groups of 9 can you make with the 27 shapes below?



Answers

Ex. 3

1. 4

2. 6

3. 3

4. 10

5. 6

6. 12

7. 10

8. 10

9. 6

10. 20

11. 3